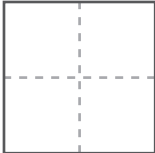
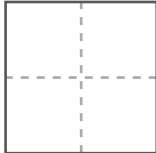



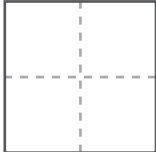
次の数字はなんでしょう

かかっている すうじの つぎにかく すうじは なんでしょう。
しかくの なかに すうじを 入れてください。

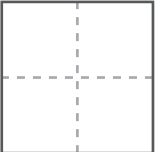
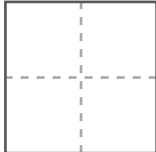
①

1 →  → 3 → 4 →  → 6

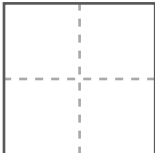
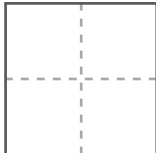
②

4 → 5 →  → 7 → 8 → 

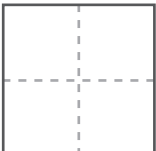
③

 → 2 → 3 →  → 5 → 6

④

3 →  → 5 → 6 →  → 8

⑤

5 → 6 →  → 8 → 9 → 